

Name _____

Date _____

Read each question and choose the best answer.


1



Which shape is shown?

- A circle
- B hexagon
- C triangle
- D trapezoid

2



Which number is missing on the number line?

- A 14
- B 17
- C 19
- D 22

3 What is sum of 7 plus 8?

- A 17
- B 15
- C 14
- D 12

4



What is the total of the coins shown?

- A 21¢
- B 26¢
- C 41¢
- D 46¢

5 Which number sentence is true?

- A $4 + 5 = 10$
- B $2 + 3 = 6$
- C $6 + 7 = 13$
- D $4 + 5 = 9$

6 Lea has 4 cards. She gets 4 more. How many cards does Lea have now?

- A 9
- B 8
- C 7
- D 6

7 Which number is ten more than 5?

- A 50
- B 15
- C 5
- D 0

8



What time does the clock show?

- A 5:00
- B 5:30
- C 4:00
- D 4:30

9 Which group of coins shows 25¢?

A



B



C



D



10 Which number sentence is true?

A $10 - 5 = 4$

B $10 - 9 = 2$

C $10 - 3 = 7$

D $10 - 2 = 12$

11 Which object is about one meter long?

A desk

B shoe

C pencil

D airplane



What part of the shape is shaded?

- A $\frac{1}{2}$
- B $\frac{1}{4}$
- C $\frac{1}{3}$
- D $\frac{3}{4}$

13 Which number sentence is true?

- A $17 - 5 = 9$
- B $16 - 5 = 4$
- C $13 - 5 = 10$
- D $11 - 5 = 6$

$$12 + 3 = 15$$

Which number sentence is in the same fact family?

- A $15 + 5 = 20$
- B $15 - 3 = 12$
- C $3 + 15 = 18$
- D $12 + 5 = 17$



About how tall is the boy?

- A 4 feet
- B 20 feet
- C 4 inches
- D 20 inches



What part of the shape is shaded?

- A $\frac{1}{2}$
- B $\frac{1}{4}$
- C $\frac{1}{3}$
- D $\frac{3}{4}$



What time does the clock show?

- A 9:30
- B 9:30
- C 8:00
- D 8:30

18 Which number is ten more than 9?

- A 9
- B 19
- C 20
- D 90

19 Nick has 8 crayons. He gives 3 crayons to his friend. How many crayons does Nick have now?

- A 11
- B 5
- C 4
- D 3

20 How many sides does a trapezoid have?

- A 4
- B 5
- C 6
- D 10

Name _____

Date _____

Read each question and choose the best answer.



What time does the clock show?

- A 7:10
- B 7:15
- C 7:20
- D 7:25

2 In which place value is the 3 in the number 735?


- A thousands
- B hundreds
- C tens
- D ones

3 What is sum of 72 and 86?

- A 115
- B 128
- C 152
- D 158

Favorite Day of the Week

Thursday					
Friday					
Saturday					

 = 2 votes.

How many people voted for Saturday as their favorite day?

- A 4
- B 5
- C 8
- D 10

5 Which number sentence is true?

- A $17 - 5 = 12$
- B $15 - 5 = 6$
- C $14 - 5 = 8$
- D $12 - 5 = 6$


6 Which number sentence equals 853?

- A 8 hundreds + 53 tens
- B 8 hundreds + 5 tens + 3 ones
- C 8 tens + 5 ones + 3
- D 8 tens + 5 tens + 3 ones

7 Which number is 77 rounded to the nearest 10?

- A 80
- B 77
- C 75
- D 70

8 Which picture shows \$1.00?



9 Which unit measures length?

- A inches
- B pounds
- C gallons
- D minutes

10 Which activity takes more than one hour to do?

- A brush your teeth
- B clap your hands
- C get dressed
- D watch a movie

11 Which number is 10 more than 836?

- A 947
- B 936
- C 846
- D 837

12



How much money is shown?

- A 98¢
- B 93¢
- C 78¢
- D 73¢

13 Which shape has a right angle?

A



B



C



D



14 Which is a mixed number?

A $\frac{1}{2}$

B $\frac{3}{4}$

C 7

D $8\frac{1}{3}$



Pam buys a piece of gum for 80¢. She pays with this amount. How much change does she get back?

- A 2¢
- B 5¢
- C 10¢
- D 25¢

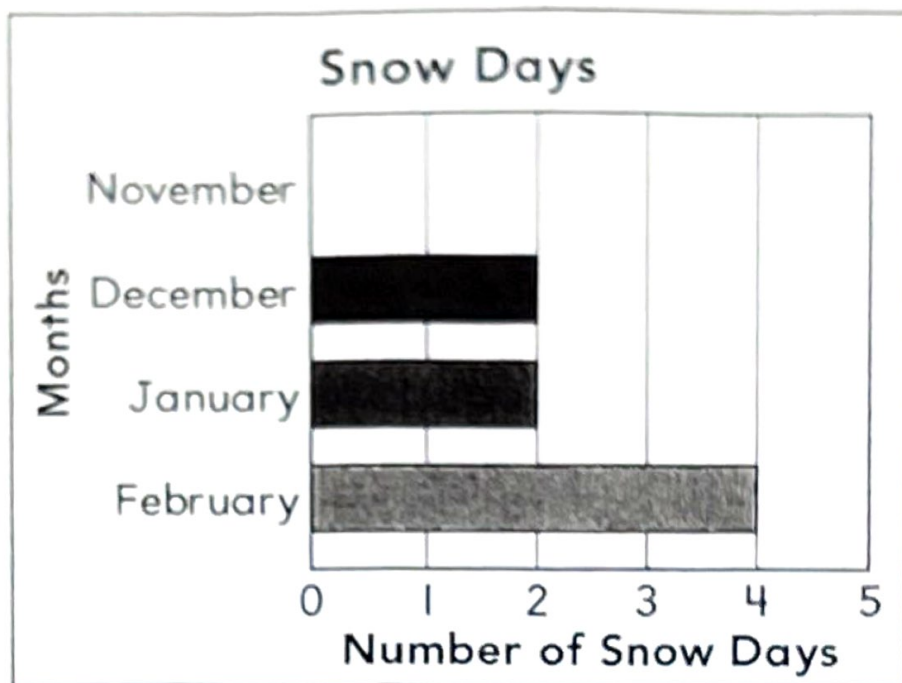
16 Lynn has 8 balloons. Half of them pop. How many does Lynn have left?

- A 8
- B 6
- C 4
- D 2



What time does the clock say?

- A 2:15
- B 2:45
- C 3:15
- D 3:45



November had half the number of snow days that January had. How many snow days were there in November?

- A 0
- B 1
- C 2
- D 3

19 Which number is 5 more than 355?

- A 345
- B 350
- C 360
- D 365

20 Which number is 15 more than 840?

- A 850
- B 855
- C 860
- D 945

Answer: 855
840 + 15 = 855

312

320

330

340

Name _____

Date _____

Read each question and choose the best answer.

1

Which number is 10 less than 435?


A 335

B 425

C 430

D 445

2



Between which two numbers on the number line is 153 located?

A 100 and 120

B 120 and 140

C 140 and 160

D 160 and 180

3

Which number shows 743 rounded to the nearest 10?

A 750

B 745

C 740

D 700

4 Which statement is true?

- A $933 < 415$
- B $802 > 820$
- C $745 < 891$
- D $667 > 873$

5



How much money is shown?

- A 93¢
- B 68¢
- C 63¢
- D 58¢

6 Lori has 88¢. Which picture shows the coins she has?



7 Which picture shows thirds?

A



B




C



D



8



What fraction of the circle is shaded?

A $\frac{1}{4}$

B $\frac{1}{2}$

C $\frac{3}{4}$

D $\frac{1}{3}$

9



What is the missing shape in this repeating pattern?

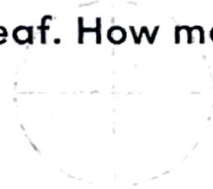
- A circle
- B square
- C triangle
- D rhombus

10 Which number sentence is true?

- A $15 - 4 = 11$
- B $17 - 3 = 15$
- C $18 - 7 = 12$
- D $20 - 6 = 26$

11 There are 14 ladybugs on a leaf. Then 6 more land on the leaf. How many ladybugs are on the leaf altogether?

- A 18
- B 20
- C 22
- D 23



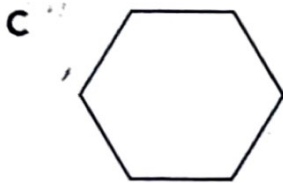
12 There are 15 sunny days in August. There are 9 sunny days in September. How many more sunny days are there in August than in September?

- A 4
- B 5
- C 6
- D 7

13 Which shape has 6 sides and 6 angles?

- A trapezoid
- B hexagon
- C triangle
- D rhombus

14 Sam draws a shape with all right angles. Which shape does he draw?



- 15 The clock shows the time a movie starts.



What time does the movie start?

- A 6:15
- B 6:45
- C 7:45
- D 7:15

- 16 Luke goes to school a half hour past 7 in the morning. What time does he go to school?

- A 6:30 A.M.
- B 7:00 P.M.
- C 7:30 P.M.
- D 7:30 A.M.

- 17 Seth measured his crayon as shown.



How long is the crayon?

- A 4 inches
- B 5 inches
- C 6 inches
- D 7 inches


18



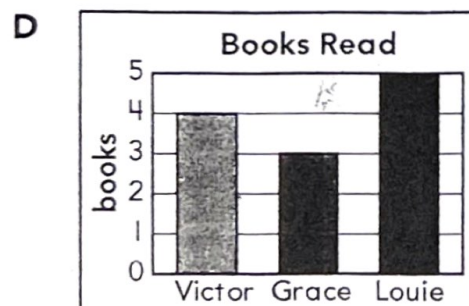
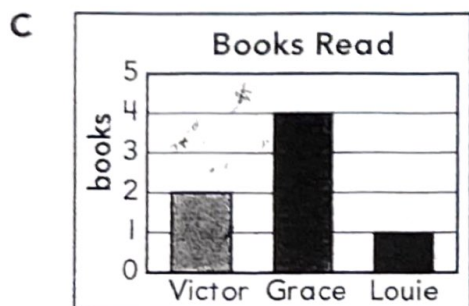
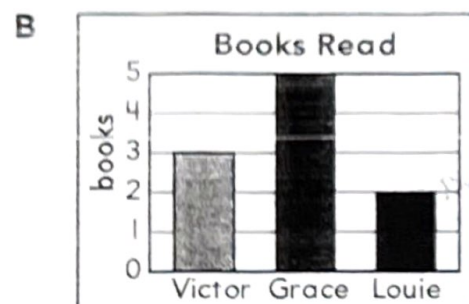
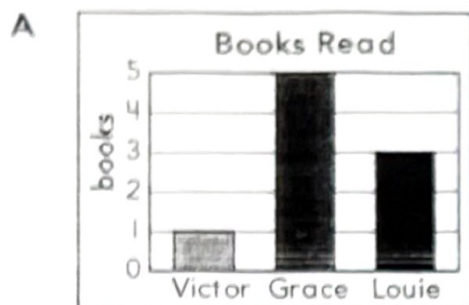
Which tool can be used to tell which item is heavier?

- A measuring cup
- B pan balance
- C clock
- D ruler

- 19 The pictograph shows the number of books each child read.



Which bar graph shows this data?



Instruments Students Play

drums	3
trumpet	7
violin	5
clarinet	4

How many more students play the trumpet than the clarinet?

- A 5
- B 4
- C 3
- D 2